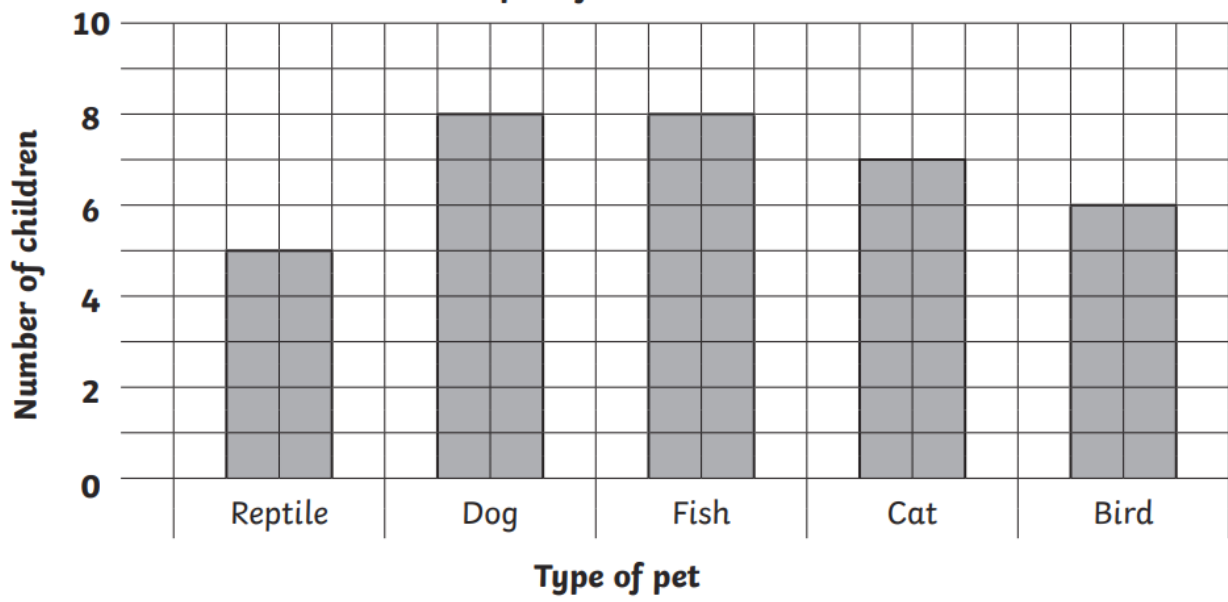


Bar Charts Answers Spicy:


Favourite Fruit


1. What is the favourite fruit? **banana**
2. How many children chose apples as their favourite fruit? **8**
3. How many more children chose bananas than grapes, as their favourite fruit? **8**
4. How many children chose apples or pears as their favourite fruit? **14**


People's favourite Pets





1) Which shape was the most popular? Octagon

2) How many votes did the square get? 4 

3) How many votes did the triangle get? 6 

4) How many votes did the pentagon get? 5 

5) How many votes did the hexagon get? 4 

6) How many votes did the octagon get? 7 

7) Which shape got the fewest votes? Rectangle