
















Eye colour	Number of children
hazel	  
green	 
brown	    
blue	   

Key

 = 5 children

How many people have brown eyes?

Which eye colour is the most popular?

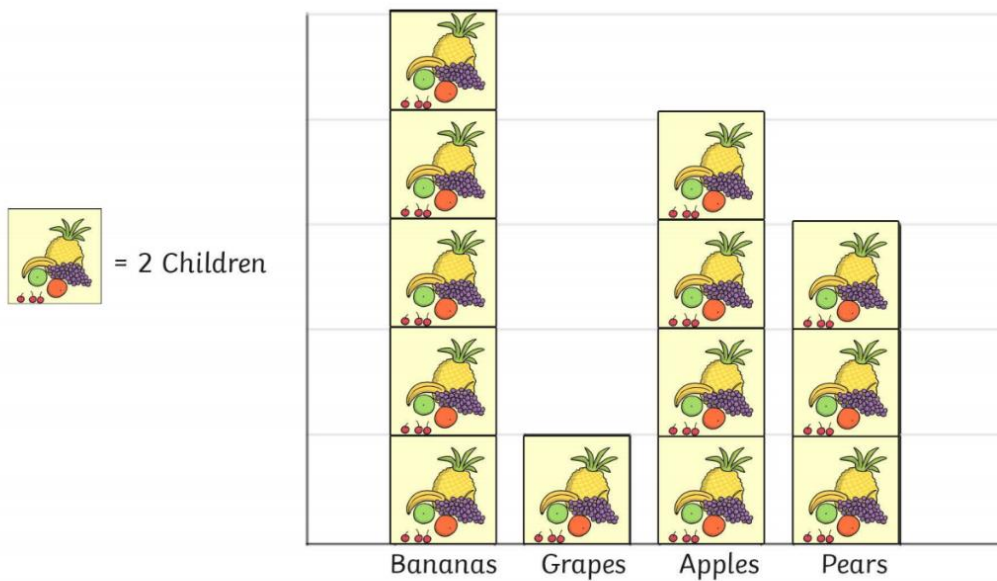
How many more people have blue eyes than green?

1)25

2)Brown

3)10

Favourite Fruit



Answer the following questions.

1. What is the favourite fruit?

2. How many children chose apples as their favourite fruit?

3. How many more children chose bananas than grapes, as their favourite fruit?

4. How many children chose apples or pears as their favourite fruit?

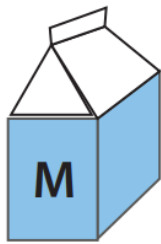
1. Bananas
























2. 8

3. 8

4. 16

Have you had your milk today yet? Use the pictograph to see how many Tommy had in the past few weeks and answer the questions below. Note: Each milk container in the pictograph stands for 3 glasses.



Week	Amount of Milk
Week 1	  
Week 2	    
Week 3	   
Week 4	     
Week 5	    

Questions:

 = 3 glasses of milk

1. How many glasses of milk did Tommy have in the first week?

Answer: _____

2. How many glasses of milk did Tommy have in week 4?

Answer: _____

3. Which week did Tommy have the least amount of milk?

Answer: _____

4. Which week did Tommy have the most milk? How much more was this compared to week 5?

Answer: _____

1.9

2.18

3. Week 1

4. Week 4 by 3 glasses