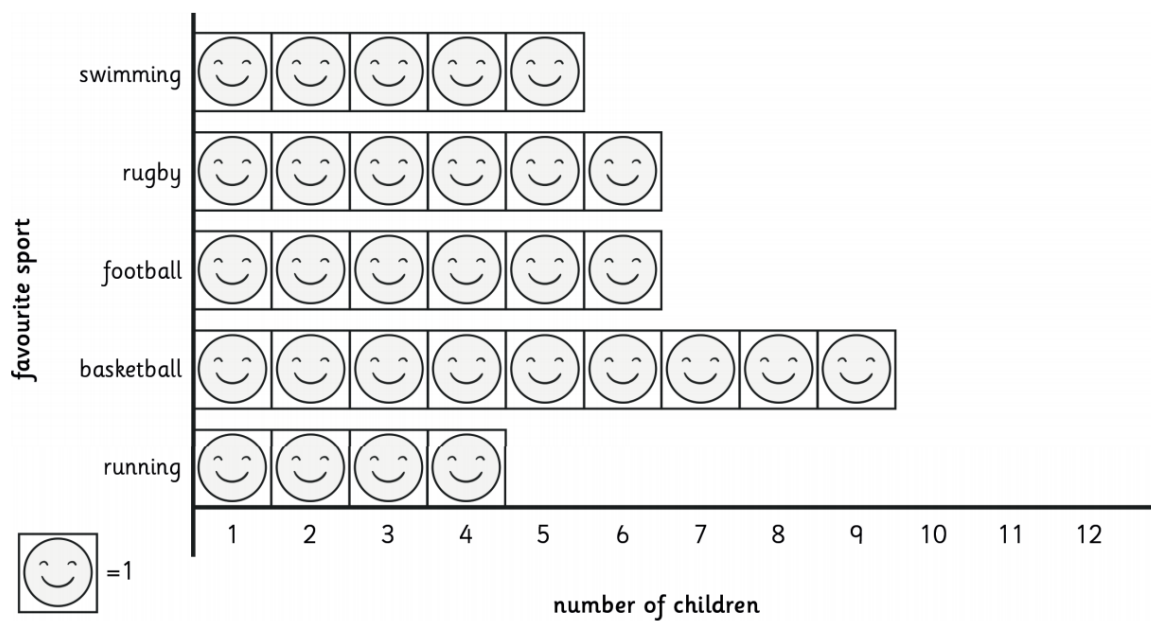


This pictogram shows the favourite sports that children picked.



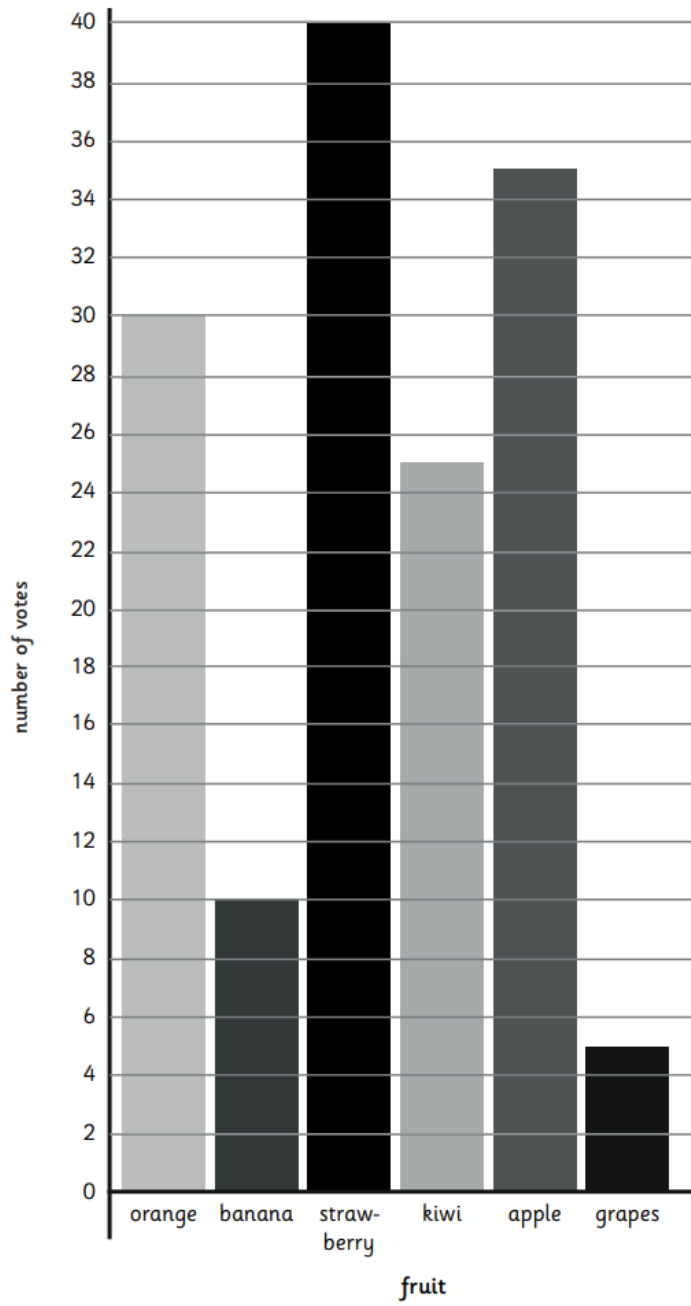
a) What was the most popular sport?

b) How many more children liked rugby than running?

c) How many fewer children liked swimming than basketball?

d) How many children picked football?

A Chart to Show the Favourite Fruit of Market Shoppers.



Fruit	Number of Votes
Orange	30
Grapes	
Strawberry	
	10
Kiwi	
	35

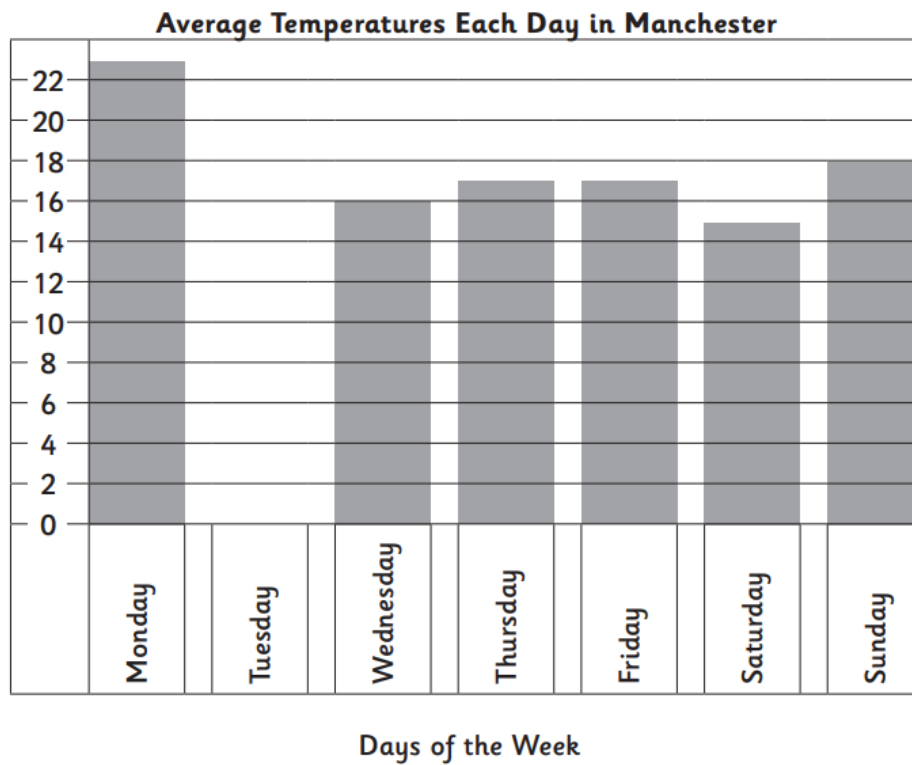
5. This is a list of the average temperatures each day in Manchester for a week.

Day	Average Temperature in °C
Monday	23
Tuesday	18
Wednesday	16
Thursday	17
Friday	17
Saturday	15
Sunday	18

a) Which was the hottest day?

b) Which was the coldest day?





Here is a bar chart of the temperatures:




c) Can you label the y-axis?

d) Draw in the bar for Tuesday

4. Tick the statements that describe the pictogram correctly.

Music Genre	Number of people
Jazz	
Classical	
R&B	
Rock	

Key:  = 4 people

A.	Half the number of people that like R&B like rock.	<input type="checkbox"/>
B.	Only 20 people like jazz.	<input type="checkbox"/>
C.	More people prefer rock music than classical music.	<input type="checkbox"/>
D.	The two most popular genres are jazz and R&B.	<input type="checkbox"/>

