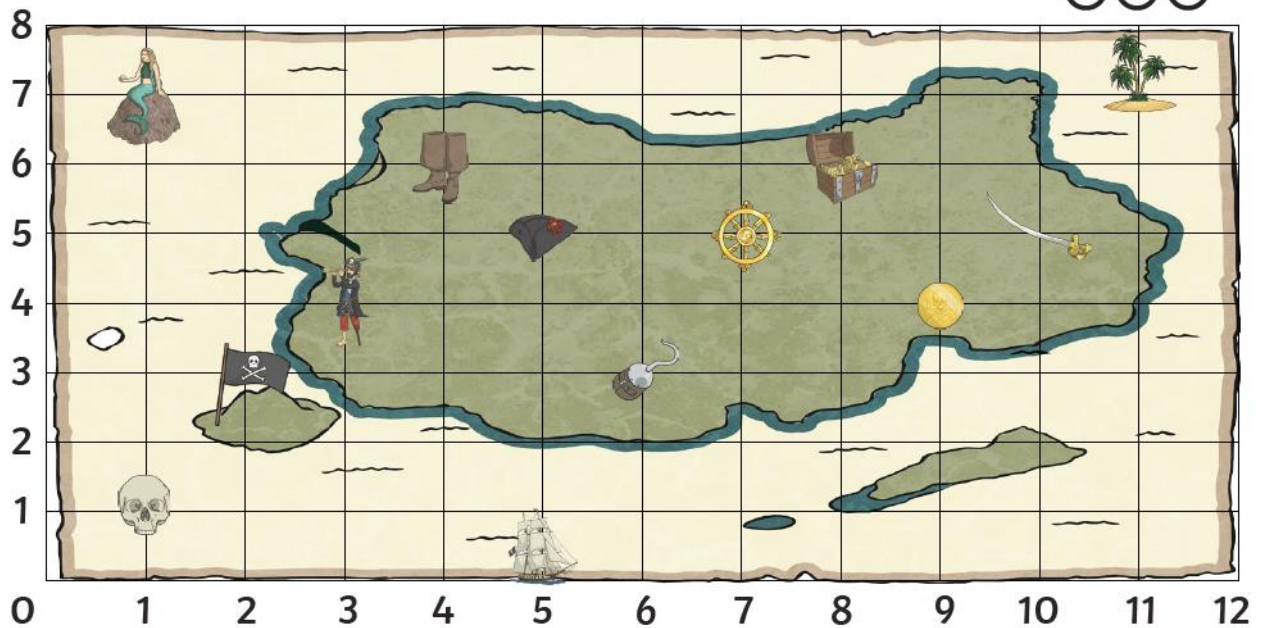




Pirate Map Coordinates

I can read, write and plot coordinates in the first quadrant.



What is at these coordinates
on the pirate map?

(1,7) = _____


(1,1) = _____


(5,0) = _____


(9,4) = _____


(8,6) = _____


Write the coordinate of these
places on the pirate map:

 = (,)

 = (,)

 = (,)

 = (,)

 = (,)

Plot these coordinates on
the grid using a cross.

(2,1)

(3,7)

(4,4)

(9,1)

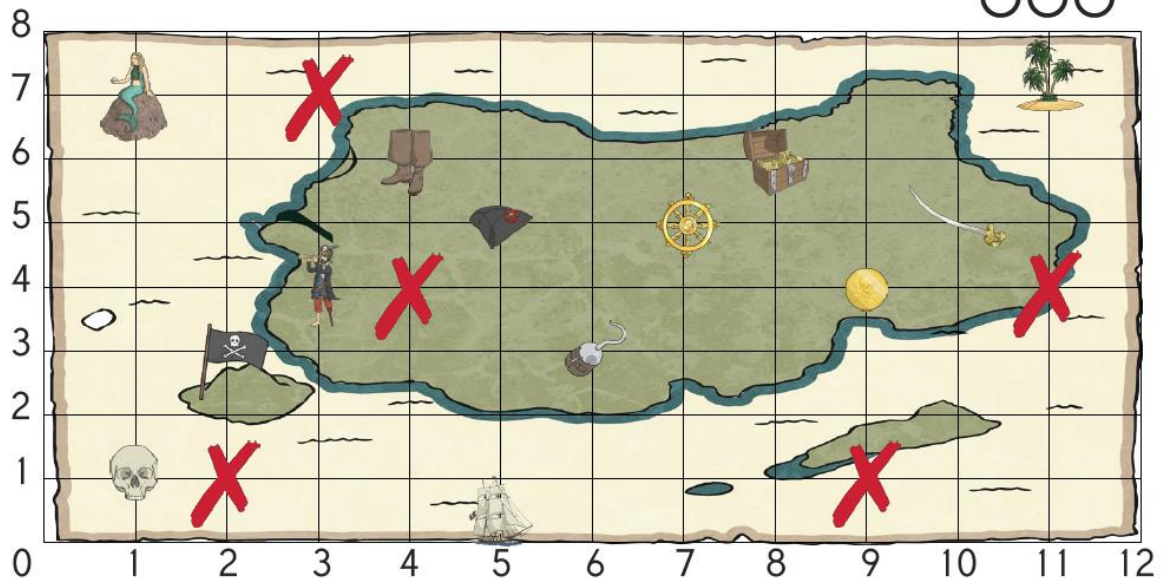
(11,4)

Answers:



Pirate Map Coordinates **Answers**

I can read, write and plot coordinates in the first quadrant.



What is at these coordinates on the pirate map?

(1,7) = mermaid


(1,1) = skull

(5,0) = ship


(9,4) = gold coin


(8,6) = treasure


Write the coordinate of these places on the pirate map:

 = (**4** , **6**)

 = (**6** , **3**)

 = (**11** , **7**)

 = (**2** , **3**)

 = (**7** , **5**)

Plot these coordinates on the grid using a cross.

(2,1)

(3,7)

(4,4)

(9,1)

(11,4)