



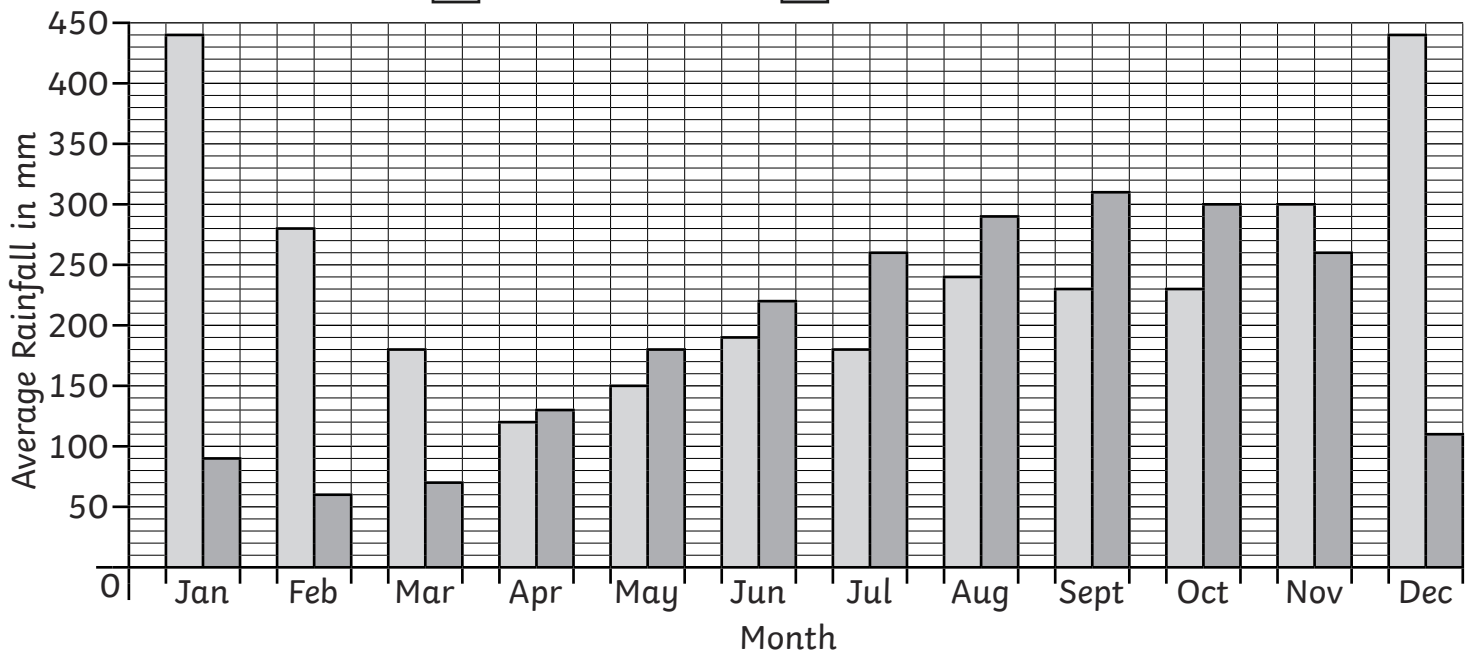
# Rainforest Statistics

I can answer questions about data presented in bar charts and graphs.



A Graph to Show the Average Rainfall in the Rainforest

Legend:  Borneo Rainforest  Amazon Rainforest



- 1) Which month in the Borneo rainforest has the lowest average rainfall?  
\_\_\_\_\_
- 2) Which month in the Amazon rainforest has the lowest average rainfall?  
\_\_\_\_\_
- 3) Which months in the Borneo rainforest have the highest average rainfall?  
\_\_\_\_\_
- 4) Which month in the Amazon rainforest has the highest average rainfall?  
\_\_\_\_\_
- 5) Which month in the Borneo rainforest has an average rainfall of 150mm?  
\_\_\_\_\_
- 6) Which month in the Amazon rainforest has an average rainfall of 300mm?  
\_\_\_\_\_
- 7) How many millimetres of rainfall does the Borneo rainforest get on average over August?  
\_\_\_\_\_
- 8) How many millimetres of rainfall does the Amazon rainforest get on average over November?  
\_\_\_\_\_
- 9) How many millimetres of rainfall does the Borneo rainforest get on average from June to August?  
\_\_\_\_\_
- 10) How many millimetres of rainfall does the Amazon rainforest get on average from June to August?  
\_\_\_\_\_
- 11) What is the difference in average rainfall between the two rainforests in February?  
\_\_\_\_\_
- 12) What is the difference in average rainfall between the two rainforests in December?  
\_\_\_\_\_



# Rainforest Statistics Answers

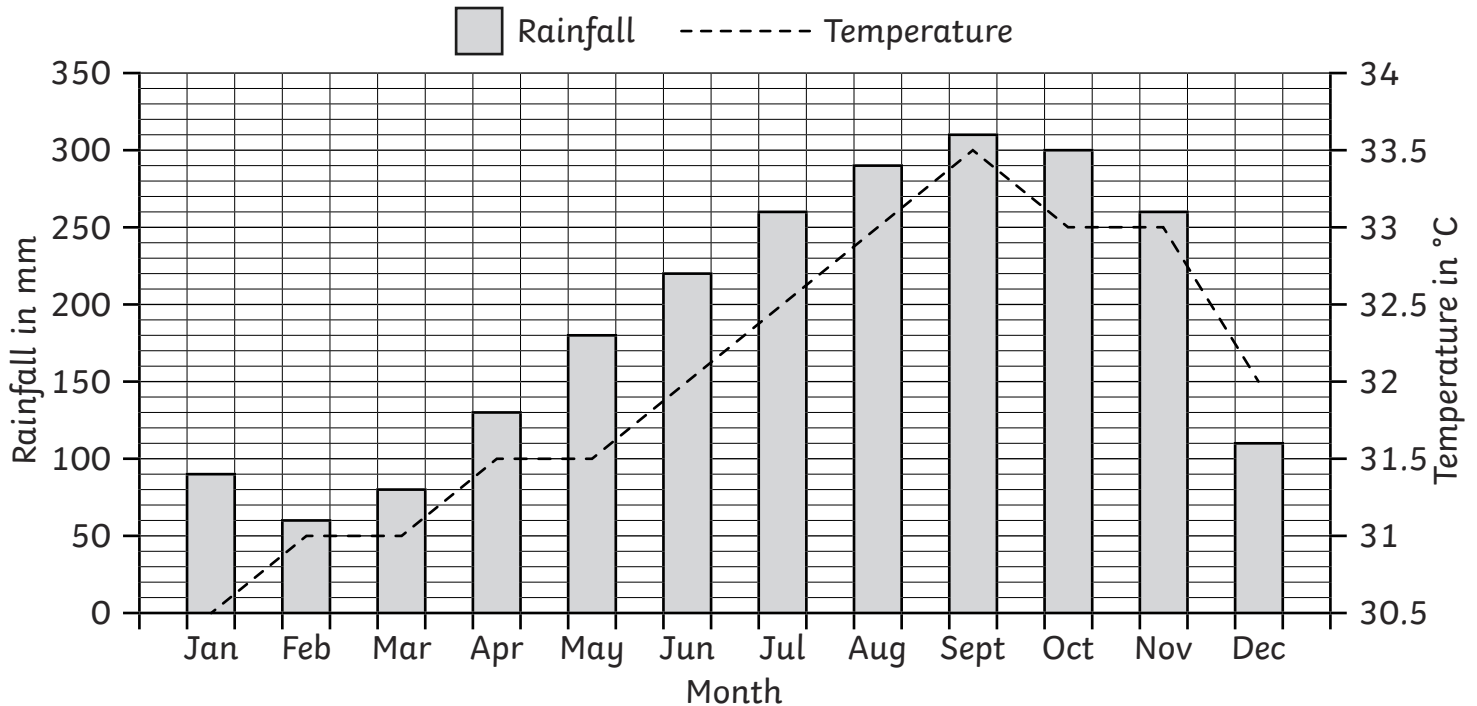
Question	Answer
1. Which month in the Borneo rainforest has the lowest average rainfall?	<i>April</i>
2. Which month in the Amazon rainforest has the lowest average rainfall?	<i>February</i>
3. Which months in the Borneo rainforest have the highest average rainfall?	<i>January and December</i>
4. Which month in the Amazon rainforest has the highest average rainfall?	<i>September</i>
5. Which month in the Borneo rainforest has an average rainfall of 150mm?	<i>May</i>
6. Which month in the Amazon rainforest has an average rainfall of 300mm?	<i>October</i>
7. How many millimetres of rainfall does the Borneo rainforest get on average over August?	<i>240mm</i>
8. How many millimetres of rainfall does the Amazon rainforest get on average over November?	<i>260mm</i>
9. How many millimetres of rainfall does the Borneo rainforest get on average from June to August?	<i>610mm</i>

10. How many millimetres of rainfall does the Amazon rainforest get on average from June to August?	<i>770mm</i>
11. What is the difference in average rainfall between the two rainforests in February?	<i>220mm</i>
12. What is the difference in average rainfall between the two rainforests in December?	<i>330mm</i>

# Rainforest Statistics

I can answer questions about data presented in bar charts and graphs.

A Climate Graph to Show the Average Temperature and Rainfall in the Amazon Rainforest



1) Which month in the Amazon rainforest has the lowest average rainfall?

\_\_\_\_\_

2) Which month in the Amazon rainforest has the highest average temperature?

\_\_\_\_\_

3) Which month in the Amazon rainforest has the highest average rainfall?

\_\_\_\_\_

4) Which month in the Amazon rainforest has the lowest average temperature?

\_\_\_\_\_

5) Which months in the Amazon rainforest have an average rainfall of 260mm?

\_\_\_\_\_

6) Which months in the Amazon rainforest have an average temperature of 31°C?

\_\_\_\_\_

7) Which months in the Amazon rainforest have an average temperature of 32°C?

\_\_\_\_\_

8) How many millimetres of rainfall does the Amazon rainforest get on average during May?

\_\_\_\_\_

9) What is the average temperature in the Amazon rainforest during August?

\_\_\_\_\_

10) What is the difference in rainfall between April and May?

\_\_\_\_\_

11) How much does the temperature rise on average from May to September?

\_\_\_\_\_

12) How many millimetres of rainfall does the Amazon rainforest get on average from September to November?

\_\_\_\_\_



# Rainforest Statistics Answers

Question	Answer
1. Which month in the Amazon rainforest has the lowest average rainfall?	<i>February</i>
2. Which month in the Amazon rainforest has the highest average temperature?	<i>September</i>
3. Which month in the Amazon rainforest has the highest average rainfall?	<i>September</i>
4. Which month in the Amazon rainforest has the lowest average temperature?	<i>January</i>
5. Which months in the Amazon rainforest have an average rainfall of 260mm?	<i>July and November</i>
6. Which months in the Amazon rainforest have an average temperature of 31°C?	<i>February and March</i>
7. Which months in the Amazon rainforest have an average temperature of 32°C?	<i>June and December</i>
8. How many millimetres of rainfall does the Amazon rainforest get on average during May?	<i>180mm</i>
9. What is the average temperature in the Amazon rainforest during August?	<i>33°C</i>

10. What is the difference in rainfall between April and May?	<i>50mm</i>
11. How much does the temperature rise on average from May to September?	<i>2°C</i>
12. How many millimetres of rainfall does the Amazon rainforest get on average from September to November?	<i>870mm</i>

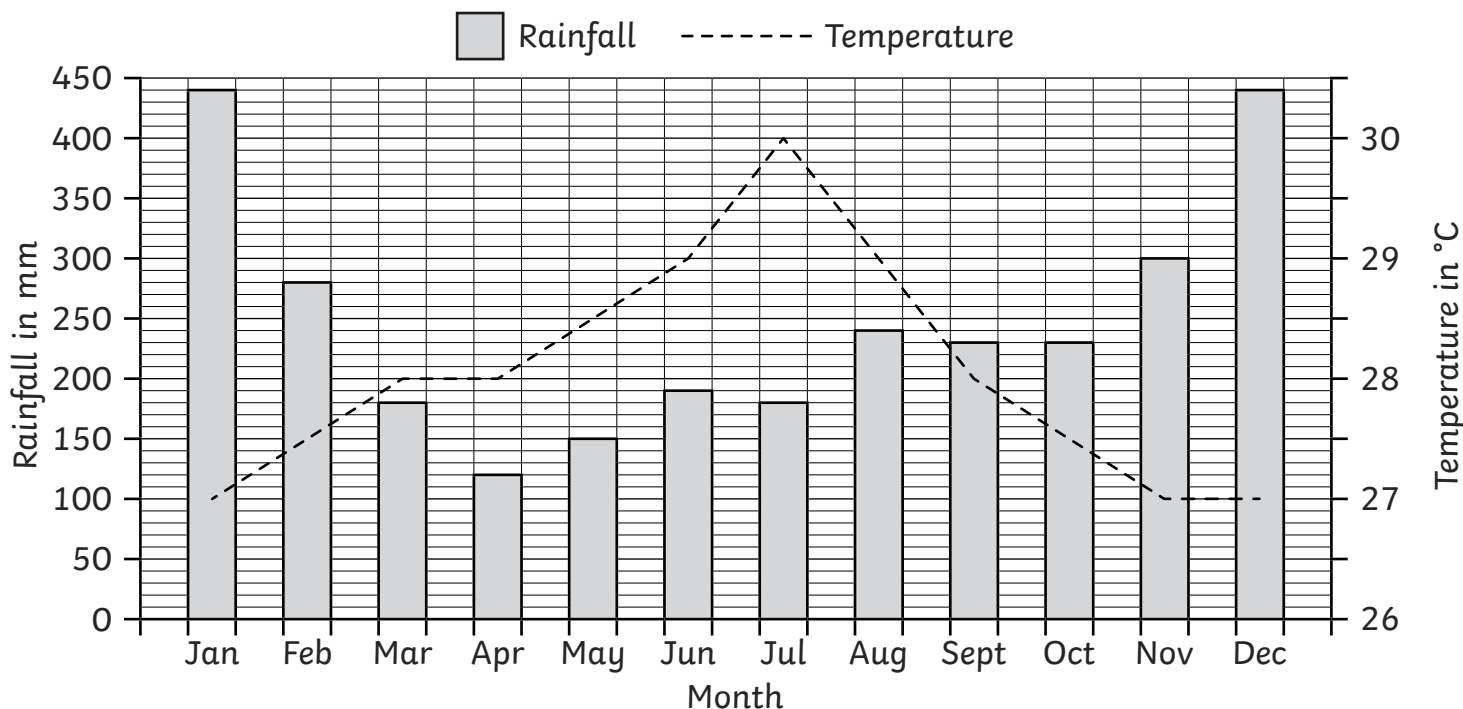


# Rainforest Statistics

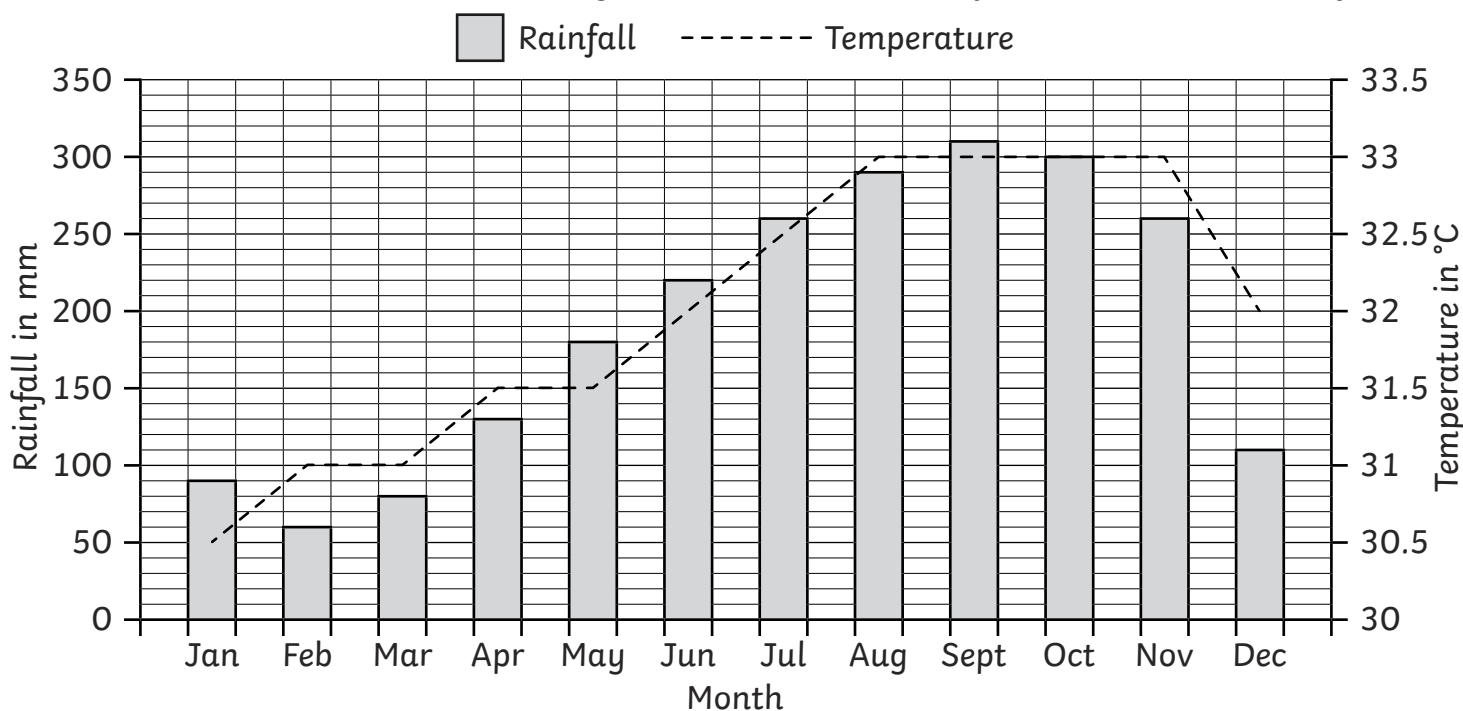
I can answer questions about data presented in bar charts and graphs.



A Climate Graph to Show the Average Temperature and Rainfall in the Borneo Rainforest



A Climate Graph to Show the Average Temperature and Rainfall in the Amazon Rainforest





1) Which month in the Amazon rainforest has the lowest average rainfall?

\_\_\_\_\_

2) Which months in the Amazon rainforest have the highest average temperature?

\_\_\_\_\_

3) Which month in the Borneo rainforest has 280mm average rain?

\_\_\_\_\_

4) Which months in the Amazon rainforest have an average temperature of 32°C?

\_\_\_\_\_

5) How many millimetres of rainfall does the Amazon rainforest get on average during April?

\_\_\_\_\_

6) What is the average temperature in the Borneo rainforest during August?

\_\_\_\_\_

7) What is the difference in average rainfall between the two rainforests in June?

\_\_\_\_\_

8) What is the difference in average rainfall between the two rainforests over the months of September and October?

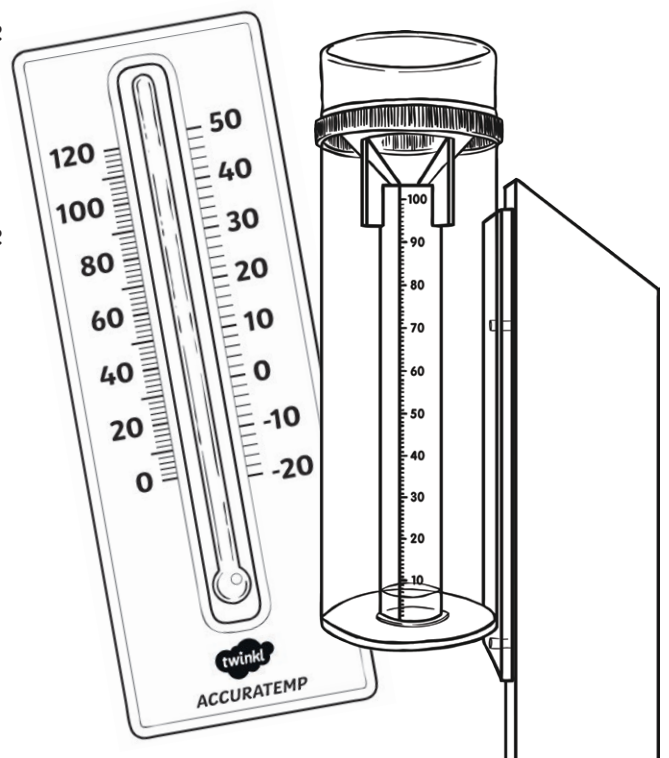
\_\_\_\_\_

9) What is the difference in average temperature between the two rainforests in January?

\_\_\_\_\_

10) What is the difference in average temperature between the two rainforests in October?

\_\_\_\_\_





# Rainforest Statistics Answers

Question	Answer
1.	Which month in the Amazon rainforest has the lowest average rainfall?
	<i>February</i>
2.	Which months in the Amazon rainforest have the highest average temperature?
	<i>August, September, October and November</i>
3.	Which month in the Borneo rainforest has 280mm average rain?
	<i>February</i>
4.	Which months in the Amazon rainforest have an average temperature of 32°C?
	<i>June and December</i>
5.	How many millimetres of rainfall does the Amazon rainforest get on average during April?
	<i>130mm</i>
6.	What is the average temperature in the Borneo rainforest during August?
	<i>29°C</i>
7.	What is the difference in average rainfall between the two rainforests in June?
	<i>30mm</i>
8.	What is the difference in average rainfall between the two rainforests over the months of September and October?
	<i>150mm</i>
9.	What is the difference in average temperature between the two rainforests in January?
	<i>3.5°C</i>
10.	What is the difference in average temperature between the two rainforests in October?
	<i>5.5°C</i>