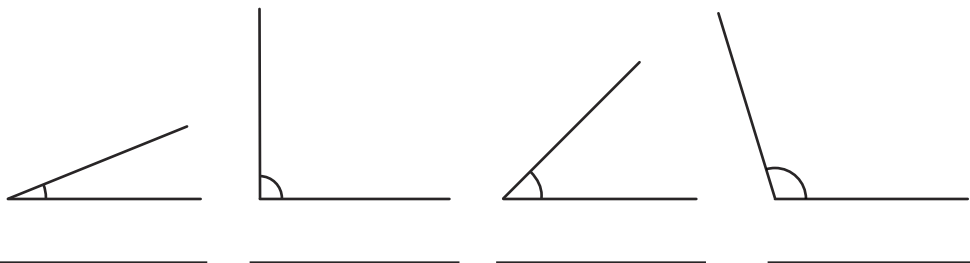


- 1) Complete these sentences:

An angle less than a right angle is called an _____ angle.

An angle greater than a right angle, but less than 180° , is called an _____ angle.

- 2) Label each of these angles as obtuse, acute or a right angle. Draw your own angle in the empty box and label it:



- 1) Are the angles between the hour and minute hands on these clocks obtuse, acute or right angles?



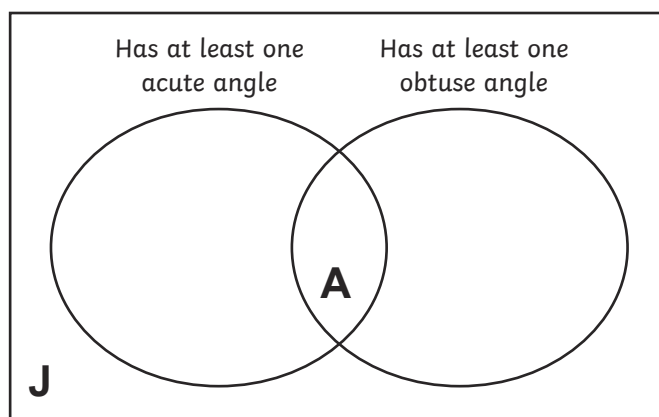







- 2) Place these letters correctly in the Venn diagram:

K E M T C Y



- 1) Draw a shape with two obtuse angles and two acute angles.



- 2) Nikolas and Carla describe this shape differently:




Nikolas

This shape has four right angles. Two of them are curved.



Carla

This shape has two right angles.



Who do you agree with? _____

Explain why: _____