






Answers

Activity 1

1. 
2. 
3. a) 
3. b) 
3. c) 

W8 Y2 L4 activity 2

1. You should have drawn loops round the following number of objects to show the repeating pattern:
 - a) 3 (done for you)
 - b) 4
 - c) 4
 - d) 5
2. You should have circled the following set of shapes:
 - a) 2nd set (square, triangle, triangle)
 - b) 2nd set (circle ... circle)