






# Recognising and Counting in Tenths

Complete the empty spaces. The first box has been completed for you. Cut out the boxes and put them in order to make your own number line.

$\frac{1}{10}$							$\frac{2}{10}$					$\frac{9}{10}$				$\frac{7}{10}$
----------------	--	--	--	--	--	--	----------------	--	--	--	--	----------------	--	--	--	----------------

One tenth	Ten tenths (one)											Five tenths				Three tenths
-----------	------------------	--	--	--	--	--	--	--	--	--	--	-------------	--	--	--	--------------

	1						0.8									
--	---	--	--	--	--	--	-----	--	--	--	--	--	--	--	--	--

																
---	--	---	---	--	--	--	--	--	--	--	--	--	--	--	--	--

Can you continue your number line?