

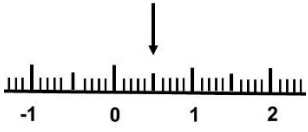


Complete the table:

Decimal	Fraction in tenths or hundredths	Simplified fraction
0.6	$\frac{6}{10}$	$\frac{3}{5}$
		
		
		
0.95		

6) Three friends share a pizza. Oscar ate 0.25 of the pizza, Ellis ate 0.3 of the pizza and Seb ate 0.35 of the pizza.

6a) Can you write the amount each child ate as a fraction?

6b) What fraction on the pizza is left?

Challenge

I have challenged you all on Times Tables Rock Stars- let's see who can beat me!

Please spend at least 10 minutes on Times Tables Rock Stars today.