














For green use the place value grid to multiply the decimals by 10, 100 and 1000.

Th	H	T	O	.	t	h	Number
							3.24
							4.12
							0.27
							2.03
							14.01

6) 4.56×100

7) 54.6×10

8) 0.546×1000

9) 5.4×100

10) 4.05×10

For red please complete the table below:

	X10	X100	X1000
13			
1			
3.14			
3.411			
0.4			
0.433			
0.4003			

Challenge- two options

There is a timed multiplication test for x10,100 and 1000 attached to the page. Time yourself to see how quickly you can complete it.

If you are unable to print things out I have uploaded a mymaths challenge you can complete.